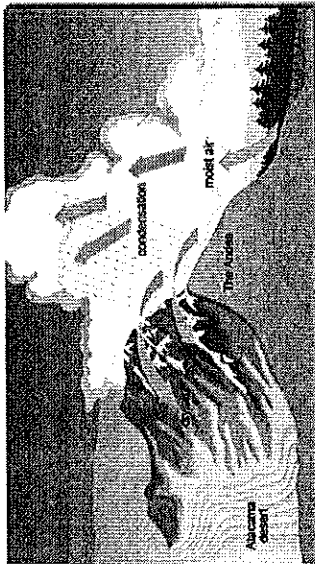


Western Geography Spring Final

Multiple Choice

Identify the choice that best completes the statement or answers the question.

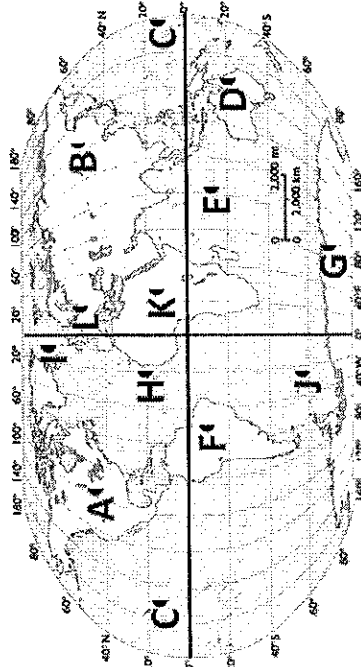
1. What major body of water forms the northern border of Ontario? _____
2. Which country is the isthmus that connects North and South America? _____
3. The Arkansas River feeds into the Mississippi River, therefore it is a _____
4. The Caribbean is made up of several groups of islands also known as a/an _____
5. What famous manmade waterway connects the Pacific and Atlantic Ocean? _____
6. Florida is an example of a/an _____
7. The major river in South America is the _____



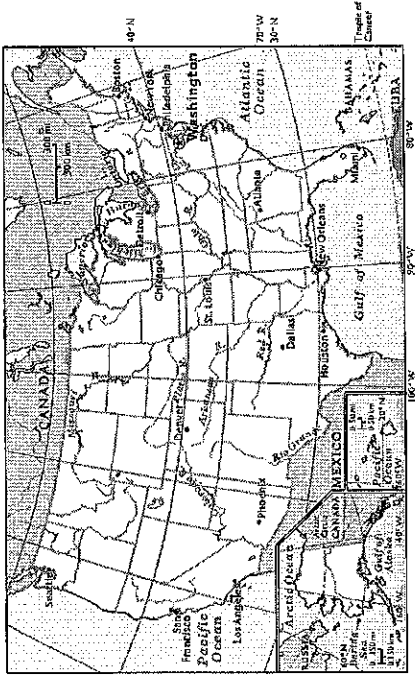
8. On the western coast of the South America warm moist air is forced over the Andes Mountain Range. Once the air reaches the other side of the range, all moisture has left as precipitation. The Atacama Desert is left with no precipitation. This is an example of a _____

9. The major religion practiced in Latin America is _____

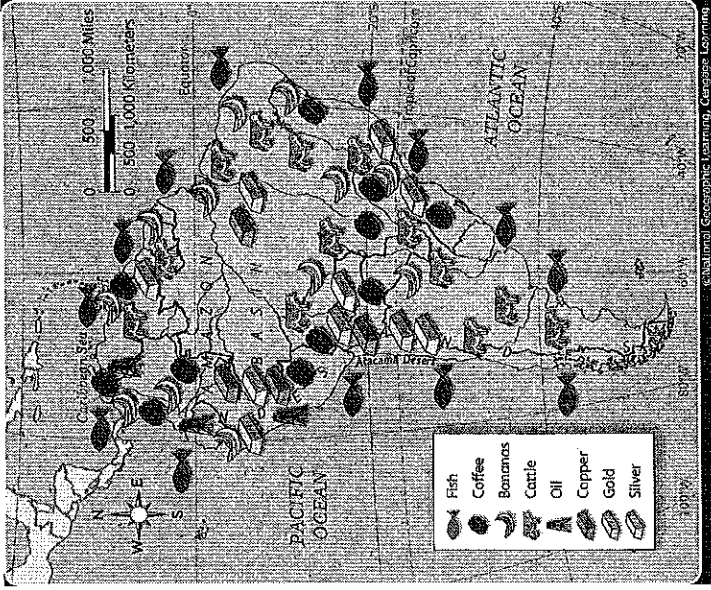
10. The majority of religions in the western hemisphere can be classified as _____
11. The founder of Islam is _____
12. The United States government has some restrictions and regulations for business but the majority of the economic decisions rest with the individual. What kind of economy is this? _____
13. In Cuba the government has complete control of all economic decisions. This is an example of what type of government/economy? _____



14. Which continent is letter A located on? _____
15. Which hemisphere is Australia located in? _____
16. Which ocean is letter E located in? _____
17. What is the only ocean that is located in all four hemispheres? _____
18. What ocean is letter H located in? _____



- 19. What city is located at 29°N, 95°W?
- 20. What are the coordinates of Washington D.C.?
- 21. 40°N, 70°W is located in what body of water?



- 22. Along which physical feature does most of the mining occur?
- 23. What is the primary resource in southern Argentina
- 24. What is the primary resources in Brazil?
- 25. Which indigenous/native peoples were known for their terraced farming techniques?
- 26. A ___ government has elected leaders that represent the people.

27. What two countries built and maintain the St. Lawrence Seaway?

28. The three branches of government in the United States are:

29. Why did the British bring African slaves to their colonies?

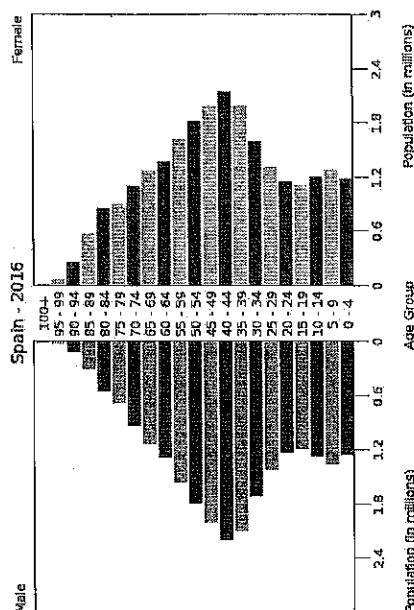
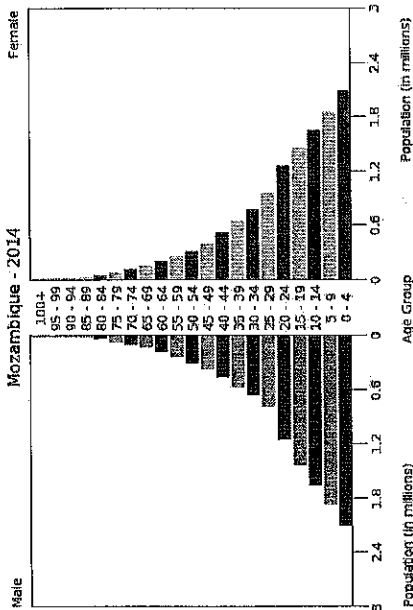
30. Why is Quebec both British and French?

31. What background do mestizos have?

32. What empire was located along the western coast of South America from 1438 until the 1530s?

33. In Brazil, from where did most slave labor come?

34. What geographic feature stretches nearly the entire width of South America?



35. What age group has the largest number of people in Spain?

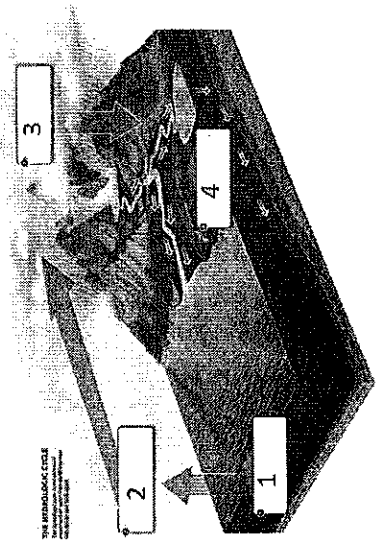
36. What age group has the largest number of people in Mozambique?

37. Which country's population is rapidly increasing?

38. Which country is more developed?

Matching

- a. Basin
 - b. Delta
 - c. Plateau
 - d. Strait
39. Land at the mouth of a river, made of sand and silt, usually shaped like a triangle _____
40. Flat land with steep sides, raised above the surrounding land _____
41. All the land drained by a river and its tributaries _____
42. A narrow channel that joins two larger bodies of water _____



- a. Evaporation
 - b. Run-off
 - c. Condensation
 - d. Precipitation
43. Name the process in 1 _____
44. Name the process in 2 _____
45. Name the process in 3 _____
- Match the following descriptions with the correct theme of geography
- a. location
 - b. place
 - c. region
 - d. movement
 - e. human-environment interaction
46. Mexico is found south of the United States and east of the Pacific Ocean _____
47. Many people immigrate from Mexico to the United States in search of jobs _____
48. Oklahoma, Texas, Arizona, and New Mexico are the Southwest _____
49. Deforestation is reducing the size of the Amazon Rainforest _____
50. Kansas is a very flat area that grows corn _____