

1st Semester Review 2017

Part 1: Multiple Choice Select the best answer for each question from the choices available.

- 1 What is the purpose of a map legend?

A explain the meaning of symbols and colors on a map	C show the unit of distance used on a map
B list the names of places on a map	D point out the specific area of the world shown on a map
- 2 What is an example of human-environment interaction?

A the erosion caused by waves	C a chart of high temperatures
B a dam used to store water	D the spread of disease
- 3 What does a political map show?

A natural features on Earth's surface	C human-created features on Earth's surface
B the population density of a given area	D the location of energy sources
- 4 What do mapmakers use to show Earth's curved surface on a flat page?

A map projections	C map legend
B labels and symbols	D areas of color
- 5 What does the Mercator map projection show accurately, making it useful for navigators?

A direction	C area
B ocean shape	D continent shape
- 6 What divides the Western Hemisphere from the Eastern Hemisphere?

A the equator	C the Tropic of Capricorn
B the prime meridian	D the Tropic of Cancer
- 7 What is a continent?

A a chain of mountains	C a group of islands
B a large body of water	D a large landmass
- 8 What sits at 0° longitude

A Equator	C Tropic of Capricorn
B Prime Meridian	D Tropic of Cancer
- 9 What sits at 0° latitude?

A South Pole	C North Pole
B the equator	D prime meridian
- 10 What is a Mercator map used for?

A Used for distance	C Used for seeing the poles
B Used for accurate area	D Used for navigation
- 11 Oil is what kind of resource?

A flow	C renewable
B nonrenewable	D mineral
- 12 Resources that do not run out but do not need to be renewed or regrown are called _____.

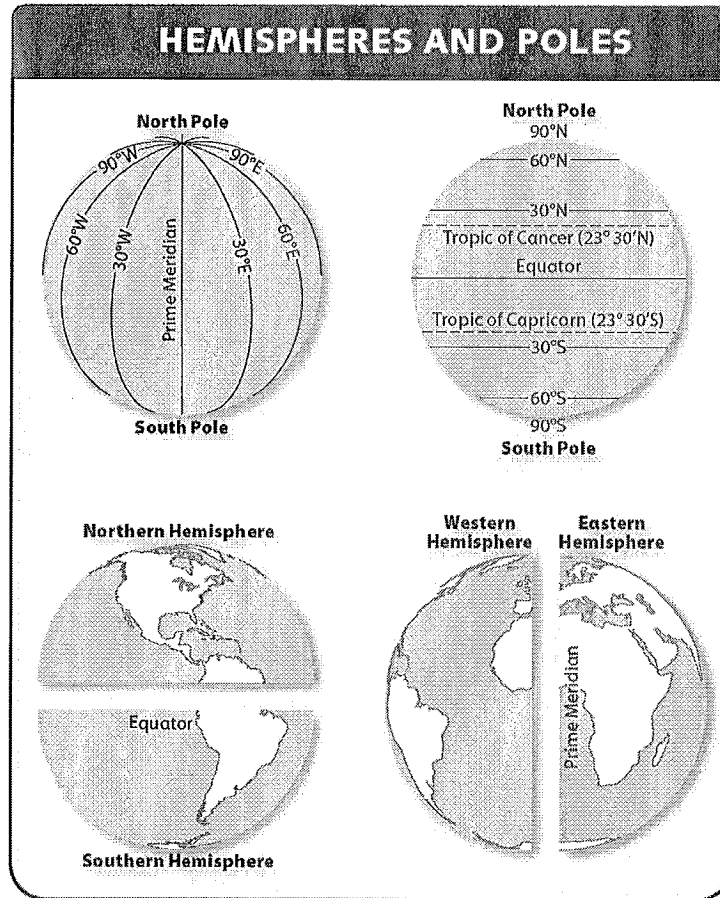
A mineral	C nonrenewable
B flow	D renewable
- 13 What is literacy rate?

A How many people can read and write	C How long you live
B How many people are born	D How many people die
- 14 What theme of geography explains how people, ideas, and animals get from one place to another?

A movement	C region
B location	D place

- 15 A Large scale map shows ____
 A political features
 B physical features
 C less detail
 D more detail
- 16 Which type of map shows the distribution of various resources?
 A economic map
 B topographical map
 C resource map
 D climate map

Part 3: Interpret Charts Use the map and your knowledge of geography to answer the questions.

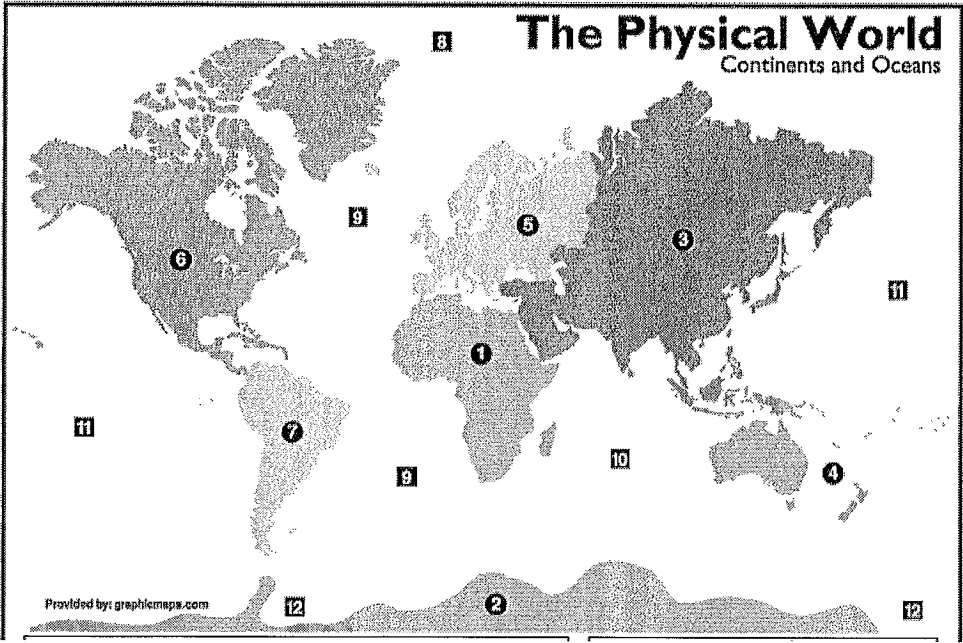


- 17 What imaginary line sits approximately 23° north of the equator?
 A prime meridian
 B Tropic of Capricorn
 C Tropic of Cancer
 D prime longitude
- 18 What is one way that latitude lines and longitude lines are different?
 A Latitude lines are measured in degrees; longitude lines are not.
 B Latitude lines never touch each other; longitude lines meet.
 C Latitude lines start at the North Pole; longitude lines start at the South Pole.
 D Latitude lines run vertically; longitude lines run horizontally.
- 19 What imaginary line connects the North Pole and the South Pole?
 A Tropic of Capricorn
 B Tropic of Cancer
 C the equator
 D prime meridian

- 20 What do geographers use the Global Positioning System to determine?
A absolute location
B land use
C population density
D relative location
- 21 What divides the Western Hemisphere from the Eastern Hemisphere?
A the equator
B the prime meridian
C the Tropic of Cancer
D the Tropic of Capricorn
- 22 Which phrase describes an absolute location?
A northwestern Canada
B south of the equator by 10 degrees
C next to Brazil
D 45 degrees North, 9 degrees East
- 23 What does the Mercator map projection show accurately, making it useful for navigators?
A area
B continent size
C direction
D ocean shape
- 24 What theme of geography explains the spread of religions around the world?
A location
B movement
C place
D region
- 25 The equator is
A the line that runs from the North Pole through Greenwich to the South Pole.
B the center line of latitude on Earth.
C the line that divides the Western Hemisphere and the Eastern Hemisphere.
D the center line of longitude on Earth.
- 26 Projections help cartographers
A decide what colors to use for land.
B show Earth's curved surface on a flat map.
C eliminate all distortions from maps.
D figure out the distances between regions.
- 27 Which climate zone has only one season?
A Arid
B Tropical Wet
C Humid Subtropical
D Mediterranean
- 28 Which climate has 4 seasons?
A Humid Continental
B Subarctic
C Tropical Wet/Dry
D Humid Subtropical
- 29 In which climate zone would you find a tropical rainforest
A Marine West Coast
B Tundra
C Tropical Wet
D Humid Subtropical
- 30 Which climate zone is only found in mountainous areas?
A Tropical Wet/Dry
B Highland
C Marine West Coast
D Mediterranean
- 31 What is the most important cause of climate?
A Elevation
B Ocean or Wind currents
C Terrain
D Latitude

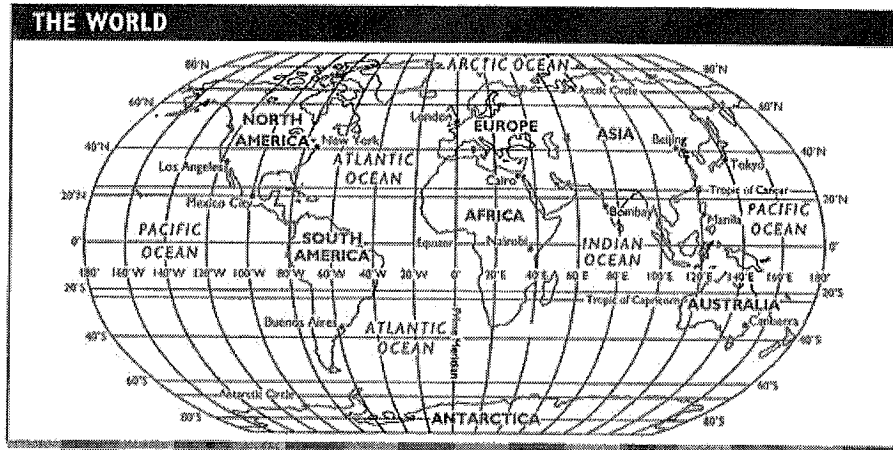
Name: _____

ID: A

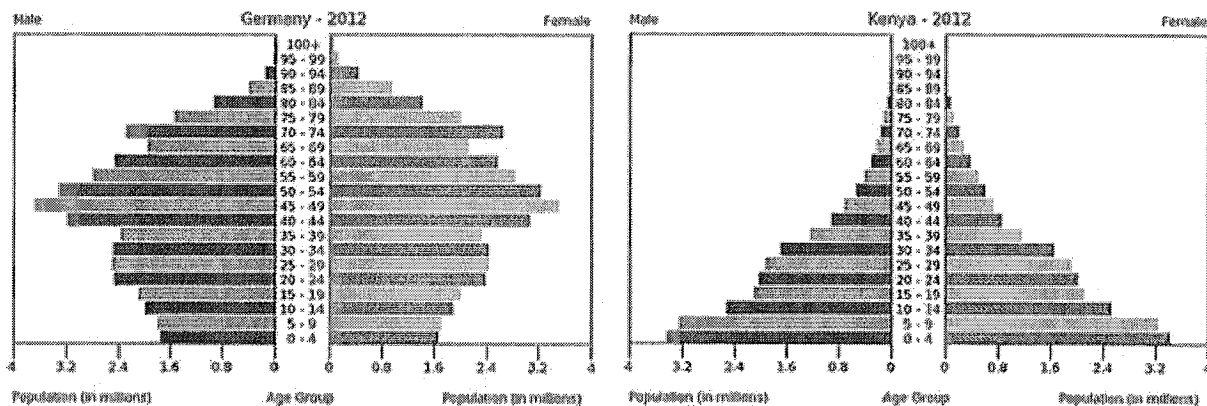


- | | | | |
|---|---------------|---|-----------|
| A | North America | G | Australia |
| B | South America | H | Atlantic |
| C | Antarctica | I | Pacific |
| D | Africa | J | Arctic |
| E | Asia | K | Indian |
| F | Europe | L | Southern |

- 32 1
- 33 2
- 34 3
- 35 4
- 36 5
- 37 6
- 38 7
- 39 8
- 40 9
- 41 10
- 42 11
- 43 12



- 44 Which city is near 40°N , 120°E ?
 A Los Angeles
 B Beijing
 C Tokyo
 D Bombay
- 45 Which longitude line is closest to Mexico City?
 A 120°W
 B 100°W
 C 140°E
 D 80°E
- 46 What is the approximate location of Nairobi?
 A 60°N , 0°
 B 0° , 60°E
 C 0° , 40°E
 D 20°S , 40°E
- 47 What city is located on the Prime Meridian?
 A Cairo
 B London
 C Tokyo
 D Buenos Aires



- 48 Which country has the highest percentage of people between the ages of 10-19?
 A Kenya
 B Germany
- 49 What age group has the largest population bulge in Germany?
 A 10-14
 B 70-74
 C 25-29
 D 45-49
- 50 What type of country is Kenya?
 A less developed
 B more developed