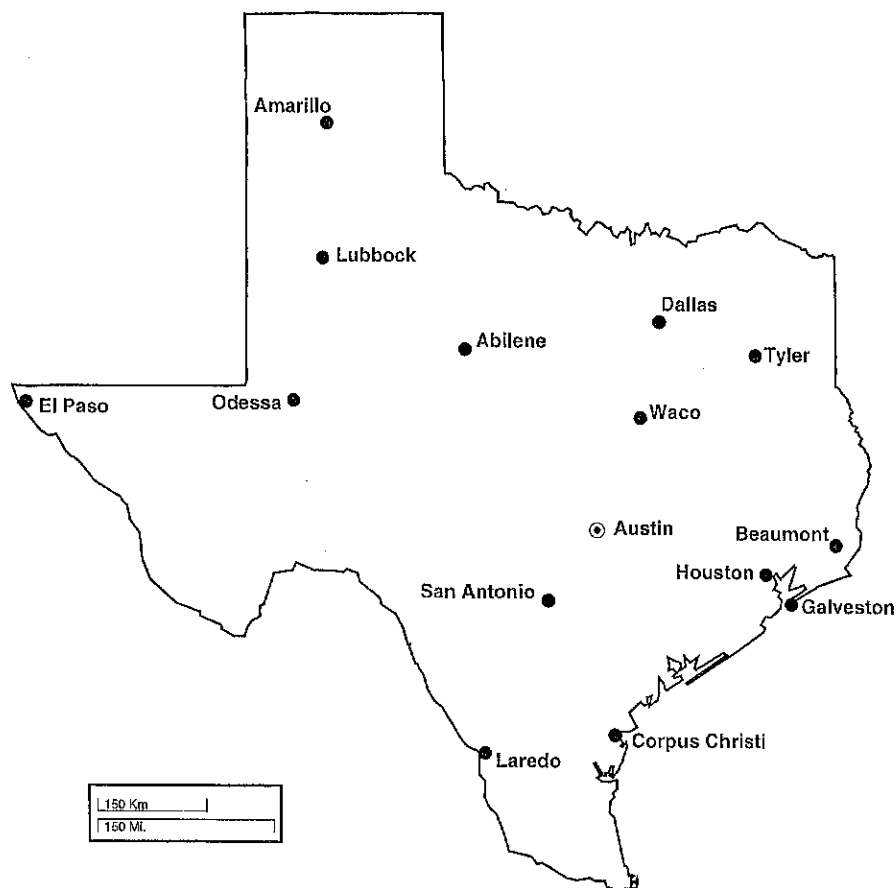


Name _____

Map Scales and Distance


As the Crow Flies

Use the map scale and a ruler to determine how far you would travel in a straight line to get from one city to another in Texas. Write your answer in approximate number of miles.



Ding Dong, Texas, is located in Bell county. Texas also has places called Loop, Earth, Tarzan, Turkey, Paris and Magnet.

1. Number of miles from Corpus Christi to Houston _____
2. Number of miles from San Antonio to Tyler _____
3. Number of miles from Houston to Dallas _____
4. Number of miles from Galveston to Austin _____
5. Number of miles from Amarillo to Corpus Christi _____
6. Number of miles from Beaumont to Lubbock _____



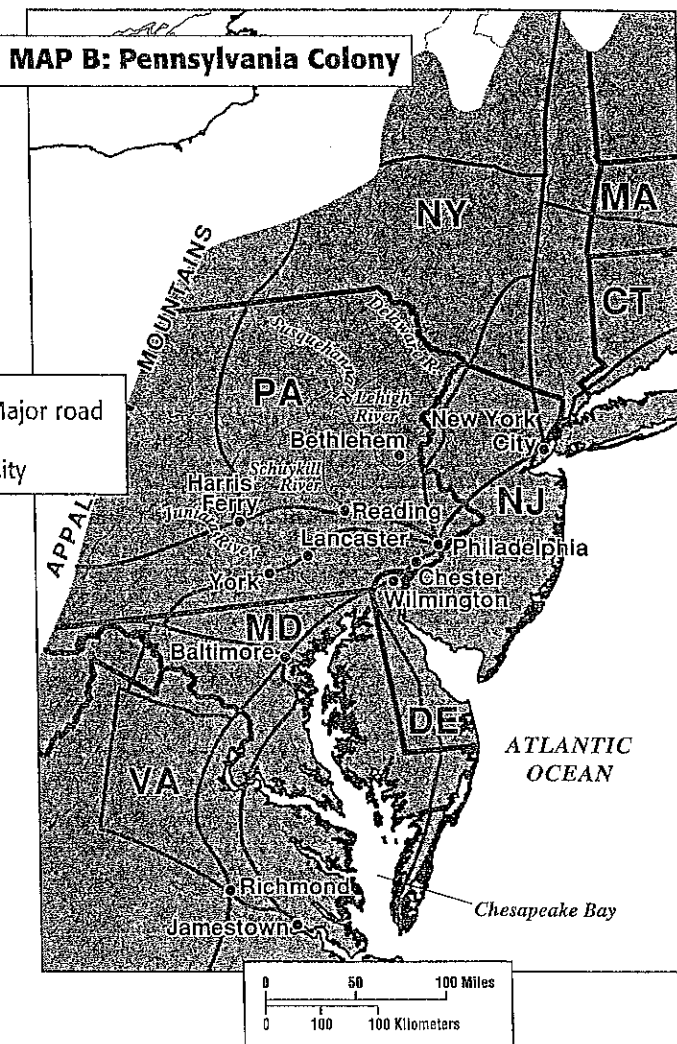
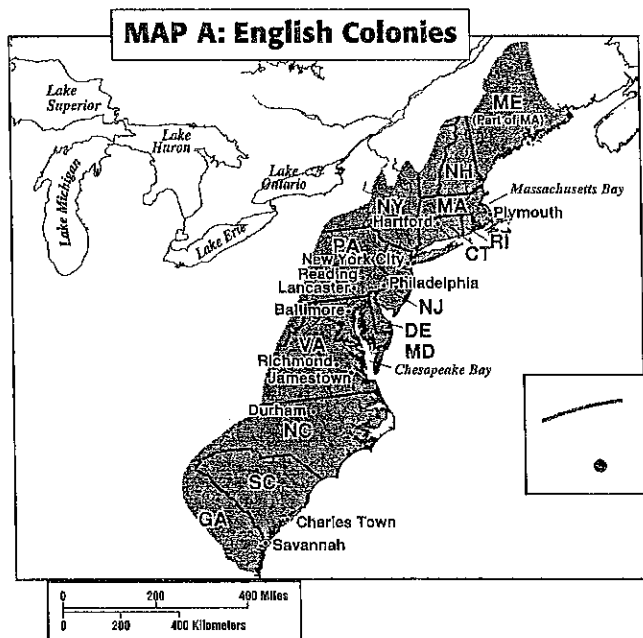
Name _____

Date _____

Comparing Map Scales

Use the two maps below to answer the questions.

Use a ruler to measure the distances on each map.



1. On Map A, one inch equals how many miles? _____

On Map B? _____

2. Which map shows a larger area? _____

3. Which map shows more detail of a smaller area? _____

4. Which map would you use if you wanted to compare all of the 13 English colonies? _____

5. What is the distance from Savannah, Georgia, to Jamestown, Virginia? _____

6. What is the distance from Harris Ferry, Pennsylvania, to Chester, Pennsylvania? _____

7. What is the distance from Richmond, Virginia, to Chester, Pennsylvania? _____

